

**GENERAL CERTIFICATE OF SECONDARY EDUCATION**  
**MATHEMATICS SYLLABUS A**  
Paper 2 (Foundation Tier)

**J512/02**

Candidates answer on the Question Paper

**OCR Supplied Materials:**  
None

- Other Materials Required:**
- Electronic calculator
  - Geometrical instruments
  - Tracing paper (optional)

**Friday 15 January 2010**  
**Morning**

**Duration: 2 hours**



Candidate Forename		Candidate Surname	
--------------------	--	-------------------	--

Centre Number						Candidate Number				
---------------	--	--	--	--	--	------------------	--	--	--	--

**INSTRUCTIONS TO CANDIDATES**

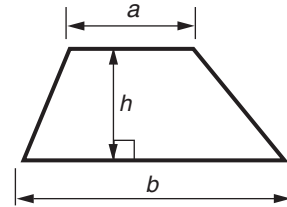
- Write your name clearly in capital letters, your Centre Number and Candidate Number in the boxes above.
- Use black ink. Pencil may be used for graphs and diagrams only.
- Read each question carefully and make sure that you know what you have to do before starting your answer.
- Show your working. Marks may be given for a correct method even if the answer is incorrect.
- Answer **all** the questions.
- Do **not** write in the bar codes.
- Write your answer to each question in the space provided, however additional paper may be used if necessary.

**INFORMATION FOR CANDIDATES**

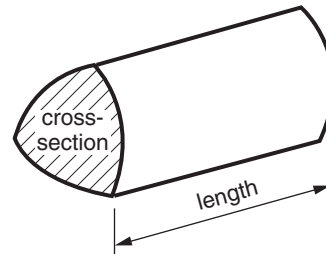
- The number of marks is given in brackets [ ] at the end of each question or part question.
- You are expected to use an electronic calculator for this paper.
- Use the  $\pi$  button on your calculator or take  $\pi$  to be 3.142 unless the question says otherwise.
- The total number of marks for this paper is **100**.
- This document consists of **20** pages. Any blank pages are indicated.

## Formulae Sheet: Foundation Tier

**Area of trapezium** =  $\frac{1}{2} (a + b)h$



**Volume of prism** = (area of cross-section)  $\times$  length



**PLEASE DO NOT WRITE ON THIS PAGE**

1

5	8	16	4
25	30	36	

From these numbers, select the correct one to fill each gap.

- (a) \_\_\_\_\_ is a multiple of 15. [1]
- (b) \_\_\_\_\_ is a factor of 12. [1]
- (c) \_\_\_\_\_ is the square of 5. [1]
- (d) The square root of \_\_\_\_\_ is 4. [1]
- (e) \_\_\_\_\_ multiplied by \_\_\_\_\_ gives the same answer as  $10^2$ .  
..... [2]
- (f) \_\_\_\_\_ is a prime number. [1]

2 (a) Write these decimals in order of size, smallest first.

0.32      0.201      0.124      0.2

.....  
.....

(a) \_\_\_\_\_ [2]  
*smallest*

(b) A box of cereal costs £2.42.

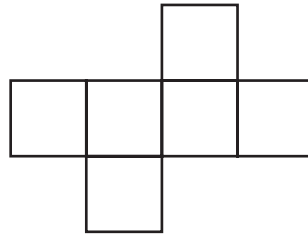
Work out the maximum number of these boxes that you can buy for £10.

.....  
.....

(b) \_\_\_\_\_ [2]

- 3 (a) Here are the nets of two 3-D shapes.

Write the name of each 3-D shape below its net.



\_\_\_\_\_

\_\_\_\_\_

[2]

- (b) Draw a sketch of a square-based pyramid.

[2]

- (c) Without drawing any diagrams, describe a cylinder.

\_\_\_\_\_

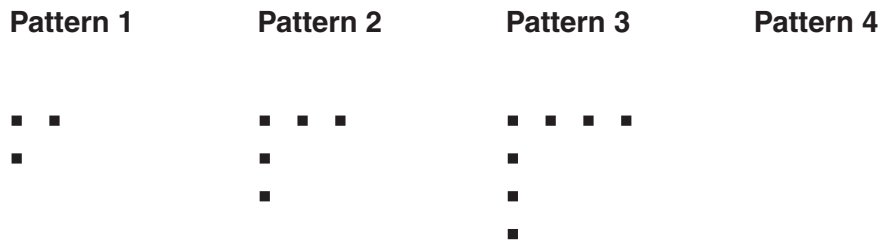
\_\_\_\_\_

\_\_\_\_\_

\_\_\_\_\_

[2]

4 (a) Here is a sequence of patterns.



(i) Draw **Pattern 4** in the space above. [1]

(ii) Complete this table.

<b>Pattern number</b>	1	2	3	4	5
<b>Number of dots</b>	3	5	7		

[1]

(b) (i) Write down the next term in this sequence.

3   6   9   12   15   \_\_\_\_\_

[1]

(ii) Explain in words how you worked out your answer.

\_\_\_\_\_

\_\_\_\_\_ [1]

(c) (i) Write down the next two terms in this sequence.

72   36   18   \_\_\_\_\_   \_\_\_\_\_

..... [2]

(ii) Explain in words how you worked out your answer.

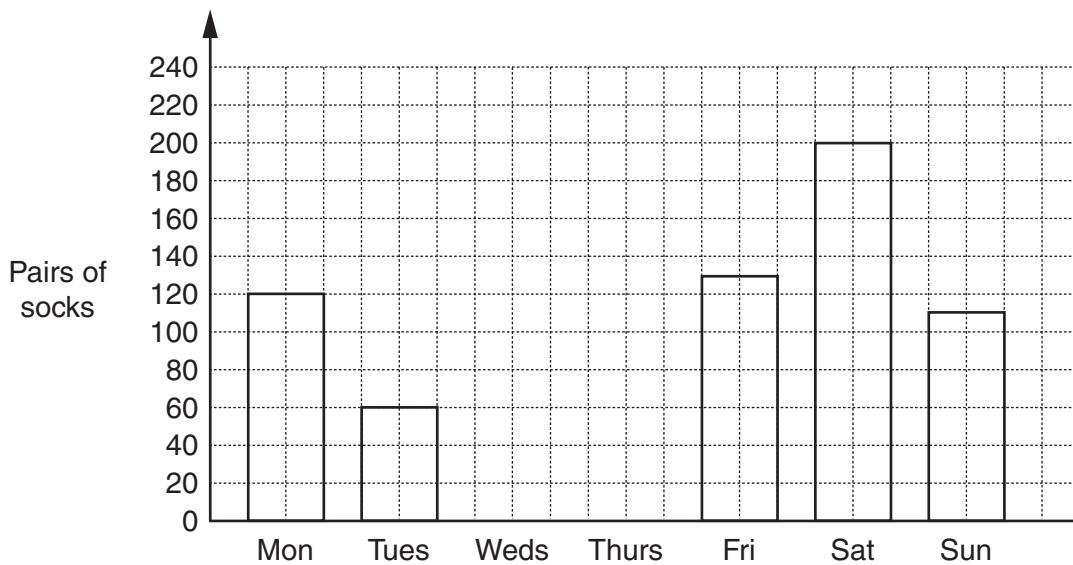
\_\_\_\_\_

\_\_\_\_\_ [1]

- 5 Jorgio sells socks.  
The pictogram shows last week's sales.

Jorgio's Socks		■ represents 40 pairs of socks
Monday	■ ■ ■	120
Tuesday	■ ■	60
Wednesday	■ ■ ■	
Thursday	■ ■	
Friday		130
Saturday		200
Sunday	■ ■ ■	110

- (a) In the pictogram, enter the numbers of pairs of socks sold on Wednesday and on Thursday. [2]
- (b) Complete the pictogram to show the sales on Friday and on Saturday. [2]
- (c) Complete the bar chart to illustrate the information shown in the pictogram.



[2]

6 (a) Write in figures the number 'four million'.

(a) \_\_\_\_\_ [1]

(b) Write 3538

(i) to the nearest 10,

(b)(i) \_\_\_\_\_ [1]

(ii) to the nearest 100.

(ii) \_\_\_\_\_ [1]

(c) Maria buys a bag of sweets costing £1.15 and a sandwich costing £1.08.

Work out how much change she receives from £5.

.....  
 .....  
 .....

(c) £ \_\_\_\_\_ [2]

7 Use your calculator to work these out.

(a)  $\sqrt{1.44}$

(a) \_\_\_\_\_ [1]

(b) 17% of 400

.....  
 .....

(b) \_\_\_\_\_ [2]

(c) 71% of 3.2

.....  
 .....

(c) \_\_\_\_\_ [2]

- 8 (a) Tania's class did a French test.  
Here are the marks.

Mark	Tally	Frequency
0		0
1		0
2		1
3		0
4		1
5		5
6		6
7		3
8		10
9		3
10		2

- (i) Write down the mode of these marks.

(a)(i) \_\_\_\_\_ [1]

- (ii) How many pupils in Tania's class did the test?

.....

(ii) \_\_\_\_\_ [1]

- (b) Some of the class did a maths challenge.  
Here are their scores.

12 15 17 21 21 23 23 26 29 35

Work out the mean of these scores.

.....  
.....  
.....

(b) \_\_\_\_\_ [3]



- 9 (a)  $n$  represents an even number.

What kind of number is represented by

(i)  $n + 1$ ,

(a)(i) \_\_\_\_\_ [1]

(ii)  $3n$ ?

(ii) \_\_\_\_\_ [1]

- (b) Work out the value of  $3x + 2y$  when  $x = 4.2$  and  $y = -5$ .

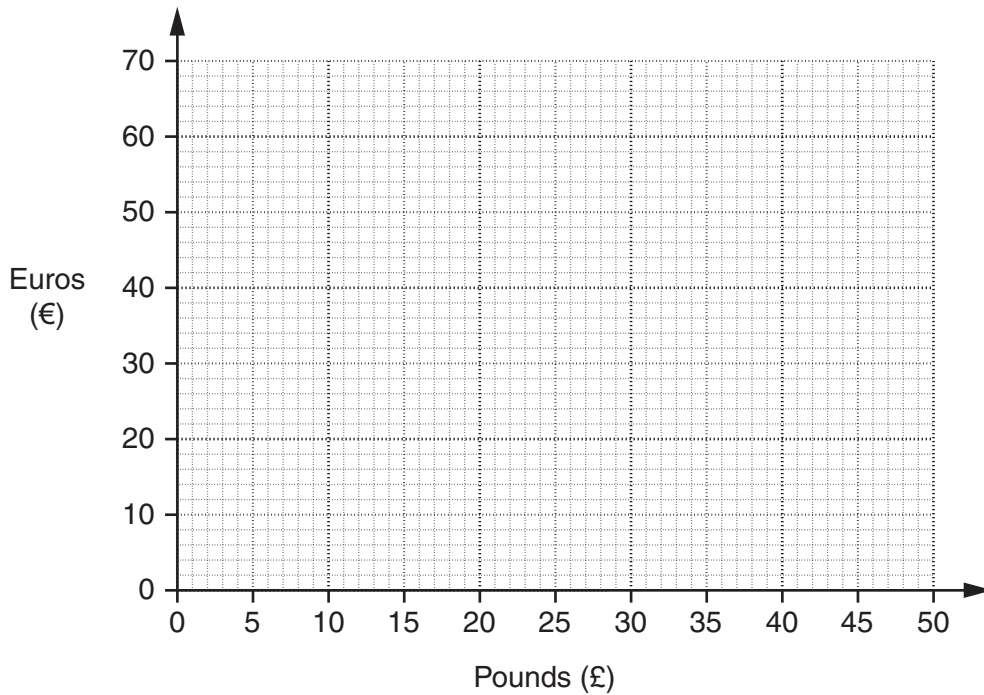
.....  
.....  
.....

(b) \_\_\_\_\_ [2]

10 Iqbal wants to change some pounds (£) into euros (€).

He could change £10 for €14  
 or £20 for €28  
 or £40 for €56.

- (a) Use this information to plot three points on the grid.  
 Join the points with a straight line to form a conversion graph.



[3]

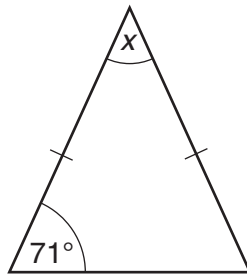
- (b) Use your graph to find how many euros Iqbal would get for £32.

(b) € \_\_\_\_\_ [1]

- (c) Use your graph to find how many pounds you would get for €20.

(c) £ \_\_\_\_\_ [1]

11 (a) Here is an isosceles triangle.



NOT TO SCALE

(i) Work out angle  $x$ .

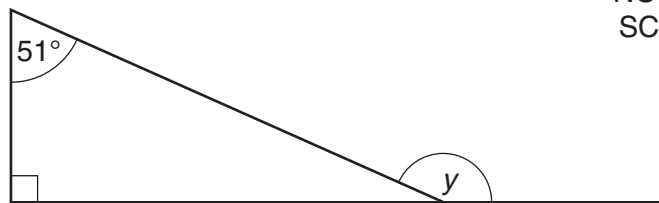
.....  
 .....

(a)(i) \_\_\_\_\_ ° [2]

(ii) Write down an angle fact that you used to work out your answer.

\_\_\_\_\_  
 \_\_\_\_\_ [1]

(b) Here is a right-angled triangle.



NOT TO SCALE

(i) Work out angle  $y$ .

.....  
 .....

(b)(i) \_\_\_\_\_ ° [2]

(ii) Write down any angle facts you used to work out your answer.

\_\_\_\_\_  
 \_\_\_\_\_  
 \_\_\_\_\_ [2]

- 12 (a)** A bag contains red, green and blue discs.  
 Eleven of the discs are red, five are green and three are blue.  
 A disc is taken from the bag at random.

Work out the probability that the disc is

- (i)** red,

.....  
 .....

**(a)(i)** \_\_\_\_\_ [2]

- (ii)** green or blue,

.....  
 .....

**(ii)** \_\_\_\_\_ [1]

- (iii)** white.

.....

**(iii)** \_\_\_\_\_ [1]

- (b)** A dice was rolled 200 times.  
 Here are the results.

Score	1	2	3	4	5	6
Frequency	23	18	26	95	22	16

Explain why these results might make you suspect that the dice is biased.

.....  
 .....  
 ..... [1]

13 Calculate.

(a)  $\frac{7.8 - 3.1}{1.2 + 6.9}$

.....  
.....

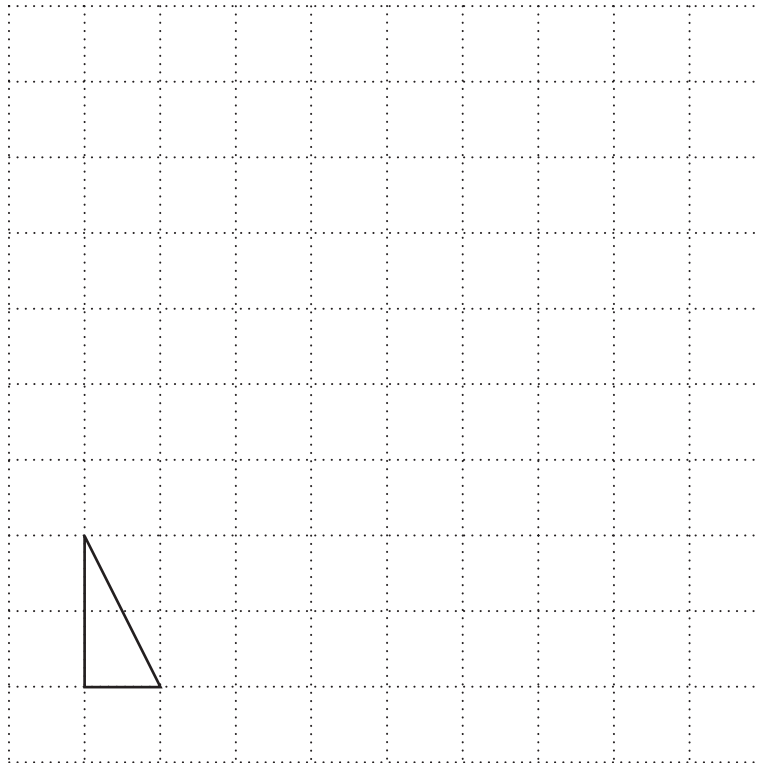
(a) \_\_\_\_\_ [2]

(b)  $\sqrt{2.56^2 - 1.4^2}$

.....  
.....

(b) \_\_\_\_\_ [2]

- 14 (a) Draw an enlargement of the triangle.  
Use a scale factor of 4.


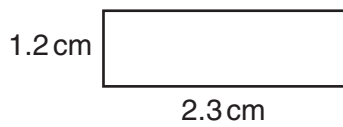


[2]

- (b) The smaller rectangle has been enlarged by a scale factor of 1.8 to give the larger rectangle.  
Work out the length and width of the larger rectangle.

.....  
 .....

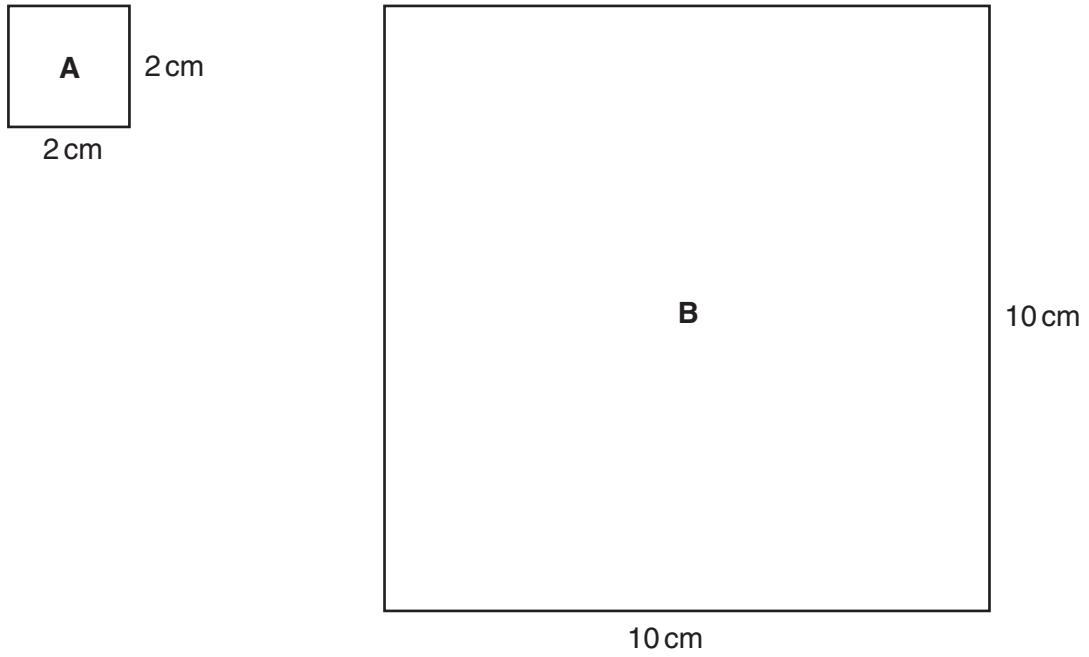
NOT TO SCALE



[2]

(c) Square **A** has been enlarged by a scale factor of 5 to give square **B**.

NOT TO SCALE



Complete this sentence.

The area of square **B** is \_\_\_\_\_ times the area of square **A**.

[2]

15 Jayne uses these ingredients to make play dough.

Play dough for 2 children	
Plain flour	225 g
Oil	2 tablespoons
Water	$\frac{3}{4}$ pint
Salt	140 g

(a) Jayne wants to make enough play dough for 10 children.

Work out the amount of water Jayne will need.

.....

.....

(a) \_\_\_\_\_ pints [2]

(b) Jayne has lots of oil and water, but only a 1.5 kg bag of plain flour and a 1 kg bag of salt.

What is the maximum number of children Jayne can make play dough for?  
You must show your working.

.....

.....

.....

.....

(b) \_\_\_\_\_ [3]

16 Gary's dogs eat 6 tins of dog food between them each day.  
The tins are sold in boxes of 44.  
Gary normally buys one box of 44 tins for each week.

Explain, showing your calculations, why Gary does not have to buy a box for the 22nd week.

\_\_\_\_\_

\_\_\_\_\_

\_\_\_\_\_

\_\_\_\_\_

[3]



17 One question on the 2001 Census form was;

'How many cars are available for use by one or more members of your household?'

There was space on the form to write down who lived at that household.

Jenna collects information about the number of people and the number of cars at each household from a sample of 100 Census forms.

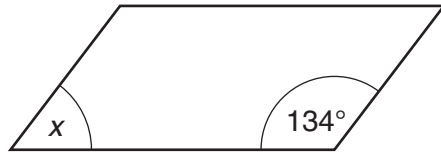
In this sample there were no households where more than 5 people lived and none had more than 3 cars.

(a) Design a two-way table for Jenna to use. [3]

(b) In Jenna's sample there are 14 households with 3 people and 2 cars.

Show this data in your table in part (a). [1]

18 (a) A parallelogram has angles as shown.



NOT TO SCALE

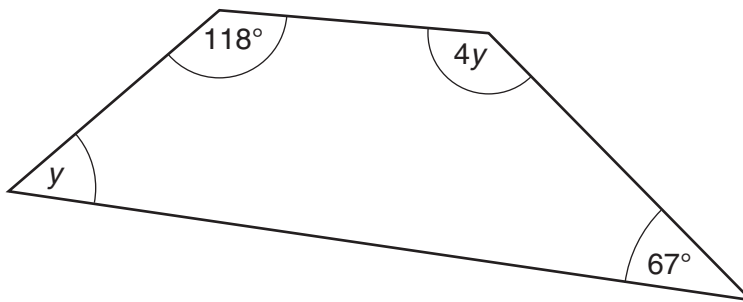
Work out angle  $x$ .  
Give a reason for your answer.

.....

$x =$  \_\_\_\_\_  $^{\circ}$  because \_\_\_\_\_

\_\_\_\_\_ [2]

(b) A quadrilateral has angles as shown.



NOT TO SCALE

Work out angle  $y$ .

.....

.....

.....

.....

(b) \_\_\_\_\_  $^{\circ}$  [4]

19 Simplify.

(a)  $d^7 \times d^4$

.....

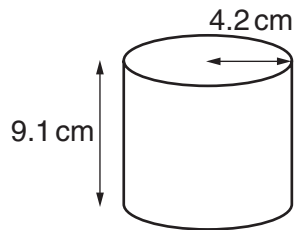
(a) \_\_\_\_\_ [1]

(b)  $\frac{d^9}{d^3}$

.....

(b) \_\_\_\_\_ [1]

20 A cylindrical tin has radius 4.2 cm and height 9.1 cm.



Work out the curved surface area of the tin.  
Give your answer to an appropriate degree of accuracy.

.....  
.....  
.....

\_\_\_\_\_ cm<sup>2</sup> [4]

**PLEASE DO NOT WRITE ON THIS PAGE**



**Copyright Information**

OCR is committed to seeking permission to reproduce all third-party content that it uses in its assessment materials. OCR has attempted to identify and contact all copyright holders whose work is used in this paper. To avoid the issue of disclosure of answer-related information to candidates, all copyright acknowledgements are reproduced in the OCR Copyright Acknowledgements Booklet. This is produced for each series of examinations, is given to all schools that receive assessment material and is freely available to download from our public website ([www.ocr.org.uk](http://www.ocr.org.uk)) after the live examination series.

If OCR has unwittingly failed to correctly acknowledge or clear any third-party content in this assessment material, OCR will be happy to correct its mistake at the earliest possible opportunity.

For queries or further information please contact the Copyright Team, First Floor, 9 Hills Road, Cambridge CB2 1GE.

OCR is part of the Cambridge Assessment Group; Cambridge Assessment is the brand name of University of Cambridge Local Examinations Syndicate (UCLES), which is itself a department of the University of Cambridge.